
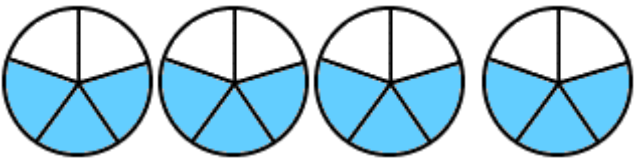



Multiplying Fractions and Whole Numbers

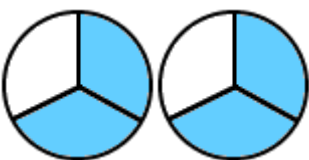
Given the following pictures, find a) the amount in each set b) the number of sets and c) the product (the total number of pieces in **mixed number** form).


1)  a) _____ in each set b) _____ sets
c) _____ x _____ = _____ total

2)  a) _____ in each set b) _____ sets
c) _____ x _____ = _____ total

3)  a) _____ in each set b) _____ sets
c) _____ x _____ = _____ total

4)  a) _____ in each set b) _____ sets
c) _____ x _____ = _____ total

5)  a) _____ in each set b) _____ sets
c) _____ x _____ = _____ total

6)  a) _____ in each set b) _____ sets
c) _____ x _____ = _____ total

7)  a) _____ in each set b) _____ sets
c) _____ x _____ = _____ total